



Recognise and name 3-D shapes

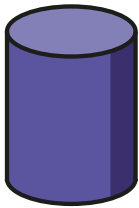
I Match each shape to its name.




sphere




cone



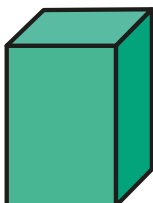
cuboid



pyramid



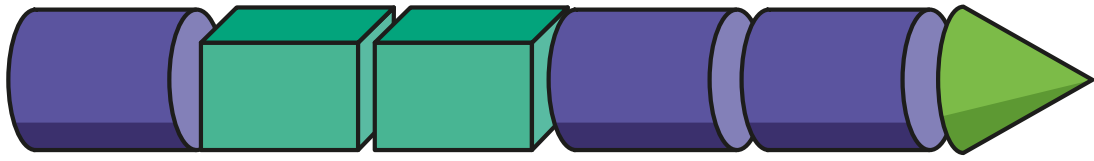
cylinder



cube



2 a) Make this train.



Complete the sentences.

The train has cylinders.

The train has 2 _____.

The last shape in the train is a _____.

b) Make a train with these shapes.

- 3 cubes
- 2 spheres
- 1 cone

Is your train the same as your partner's?
What is the same and what is different?

c) Make a train with shapes in this order.

- 1st: sphere
- 2nd: cuboid
- 3rd: cuboid
- 4th: cylinder
- 5th: pyramid

