


Introduce weight and mass

1 Which object is heavier?

Tick your answer.


☒



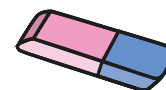
☐

How do you know?



2 Which object is lighter?

Tick your answer.



☒

☐

How do you know?



- 3 The ball is lighter than the bottle.

Tick the picture that shows this.




- 4 Choose a phrase to complete the sentences.

more than

less than


the same as

a)



The cube weighs the same as
the cylinder.

b)



The cuboid weighs more than
the sphere.